


How many coins?




1

Barti Ddu wants to buy a fish.

He has 25p.

How much more does he need?


 p

4

It takes Barti Ddu 25 minutes to sail to the cove. He starts at 2:00 p.m.

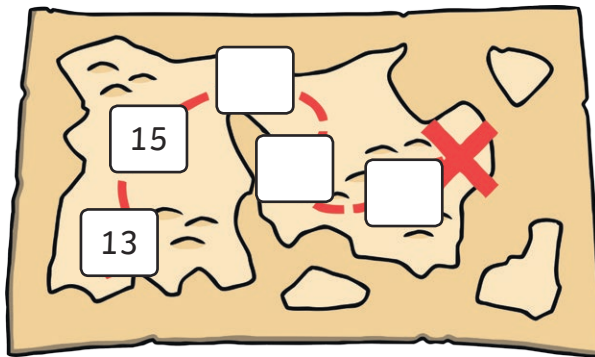


What time does he arrive?

 :

7

Barti Ddu needs help to count in twos to find the treasure.



2

Anne Bonny has seventy pence in her pocket.

She spends half.

How much does she spend?

 p

5

The temperature in Barbados is 30°C.

It is 10°C. colder in Swansea.

What is the temperature?

 °C

6


Twenty-five pirates set off to their pirate cave. Six more pirates join the ship. How many altogether?

3



1

How many coins?




5 5 2

12

4


Barti Ddu wants to buy a fish.
He has 25p.
How much more does he need?



30p

7

It takes Barti Ddu 25 minutes to sail to the cove. He starts at 2:00 p.m.

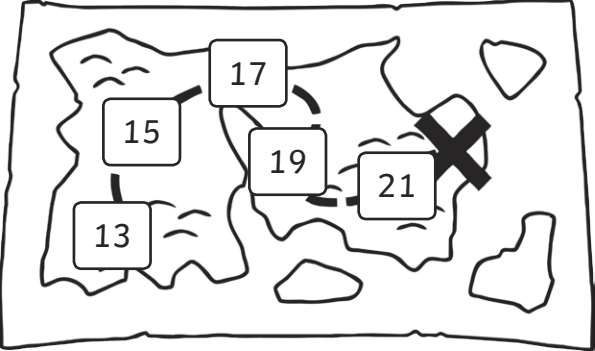


What time does he arrive?

2:25 pm

2

Barti Ddu needs help to count in twos to find the treasure.



13 15 17 19 21

5

Anne Bonny has seventy pence in her pocket.
She spends half.
How much does she spend?

35p

3

Twenty-five pirates set off to their pirate cave. Six more pirates join the ship. How many altogether?

31

6

The temperature in Barbados is 30°C.
It is 10°C. colder in Swansea.
What is the temperature?

20°C

